



UNIVERSITY OF CAMBRIDGE INTERNATIONAL EXAMINATIONS
General Certificate of Education Advanced Subsidiary Level and Advanced Level

GEOGRAPHY

9696/11

Paper 1 Core Geography

October/November 2011

INSERT

3 hours

READ THESE INSTRUCTIONS FIRST

This Insert contains all the Figures and the Table referred to in the questions.

This document consists of **6** printed pages and **2** blank pages.



Fig. 1 for Question 1

A storm hydrograph and characteristics of that drainage basin

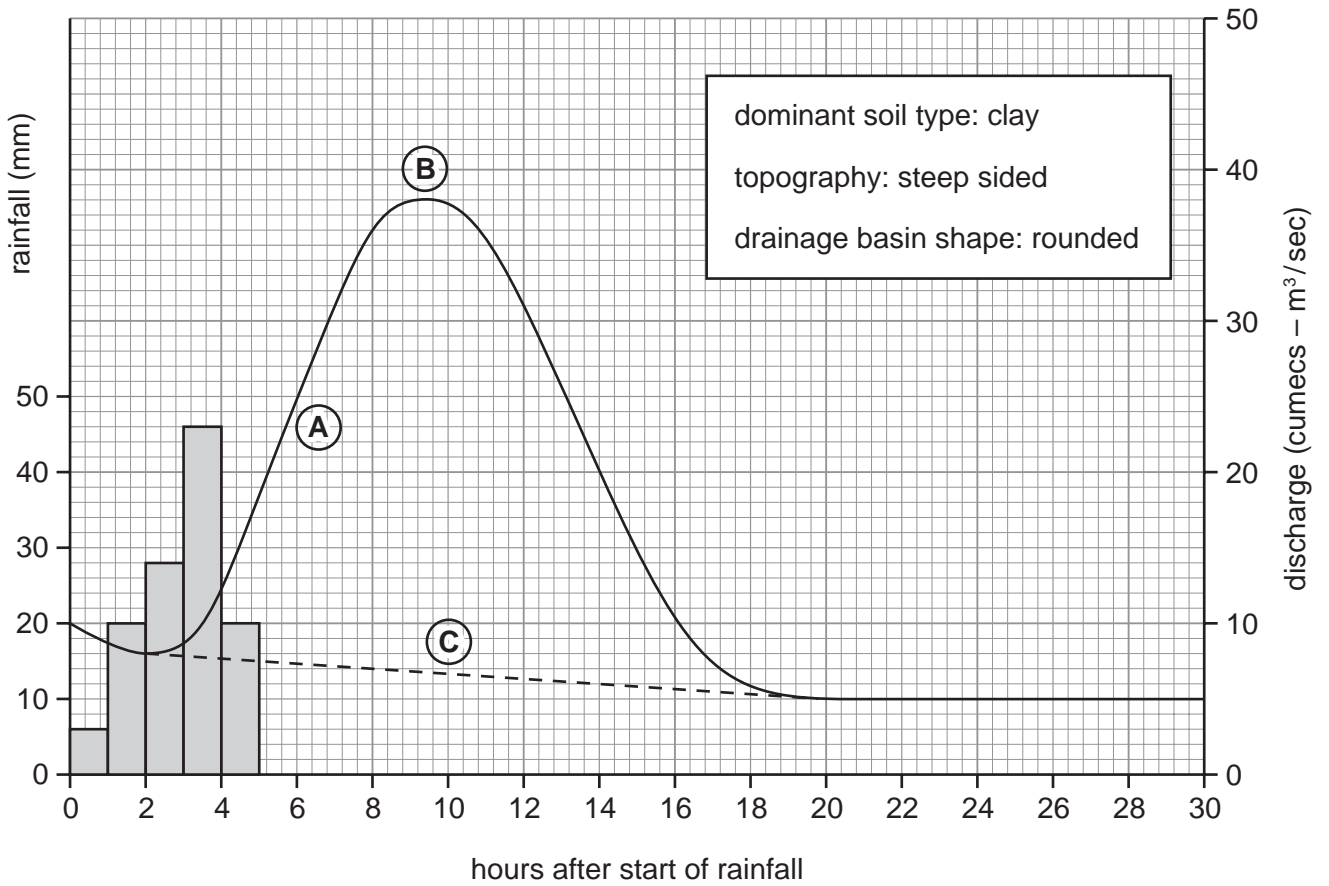


Fig. 2 for Question 2

An idealised global pattern of pressure and winds

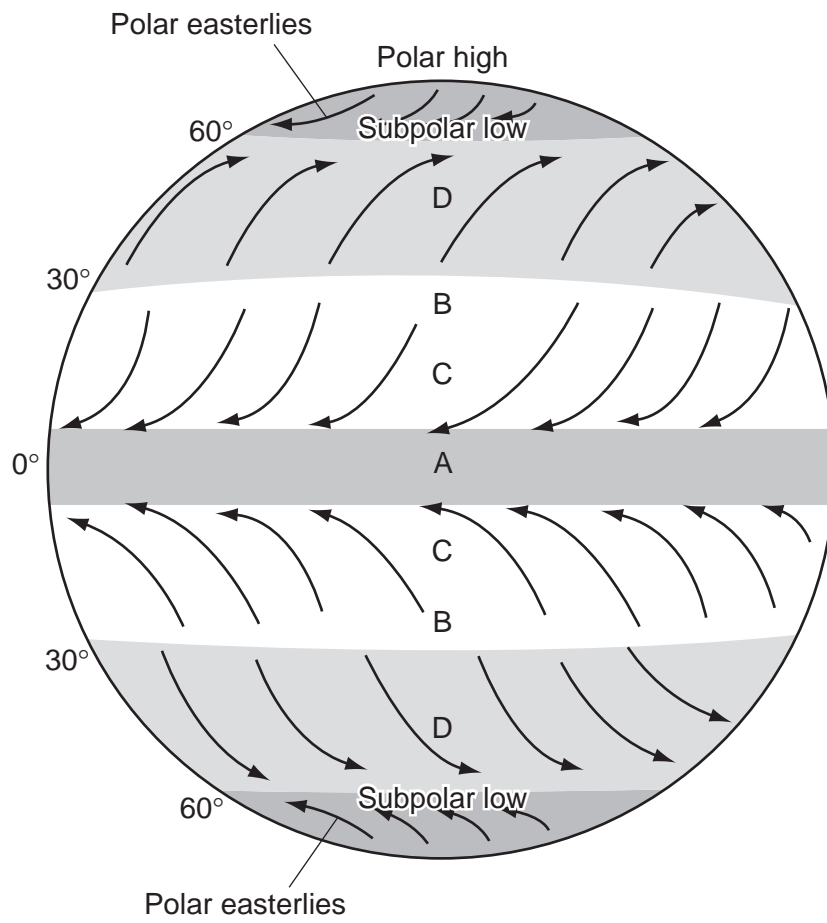


Fig. 3 for Question 3

Climates and types of weathering

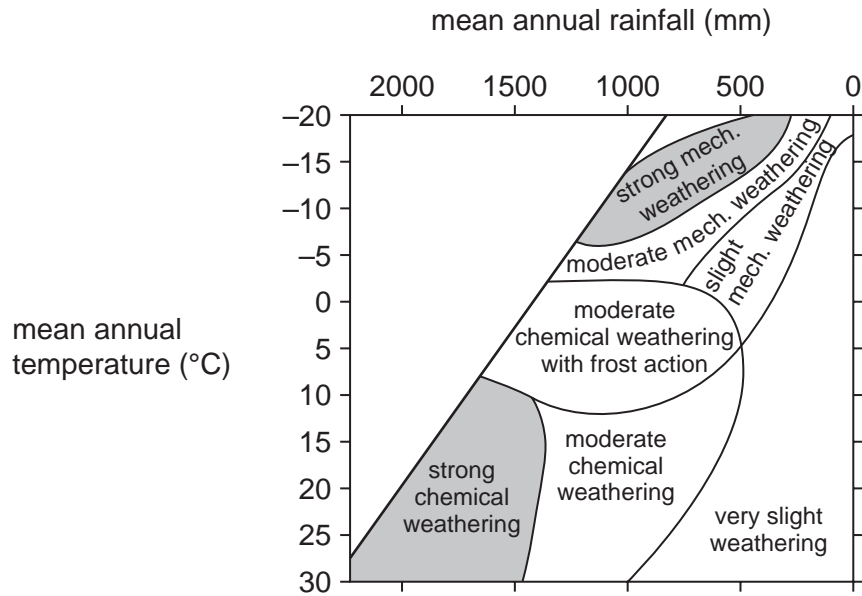
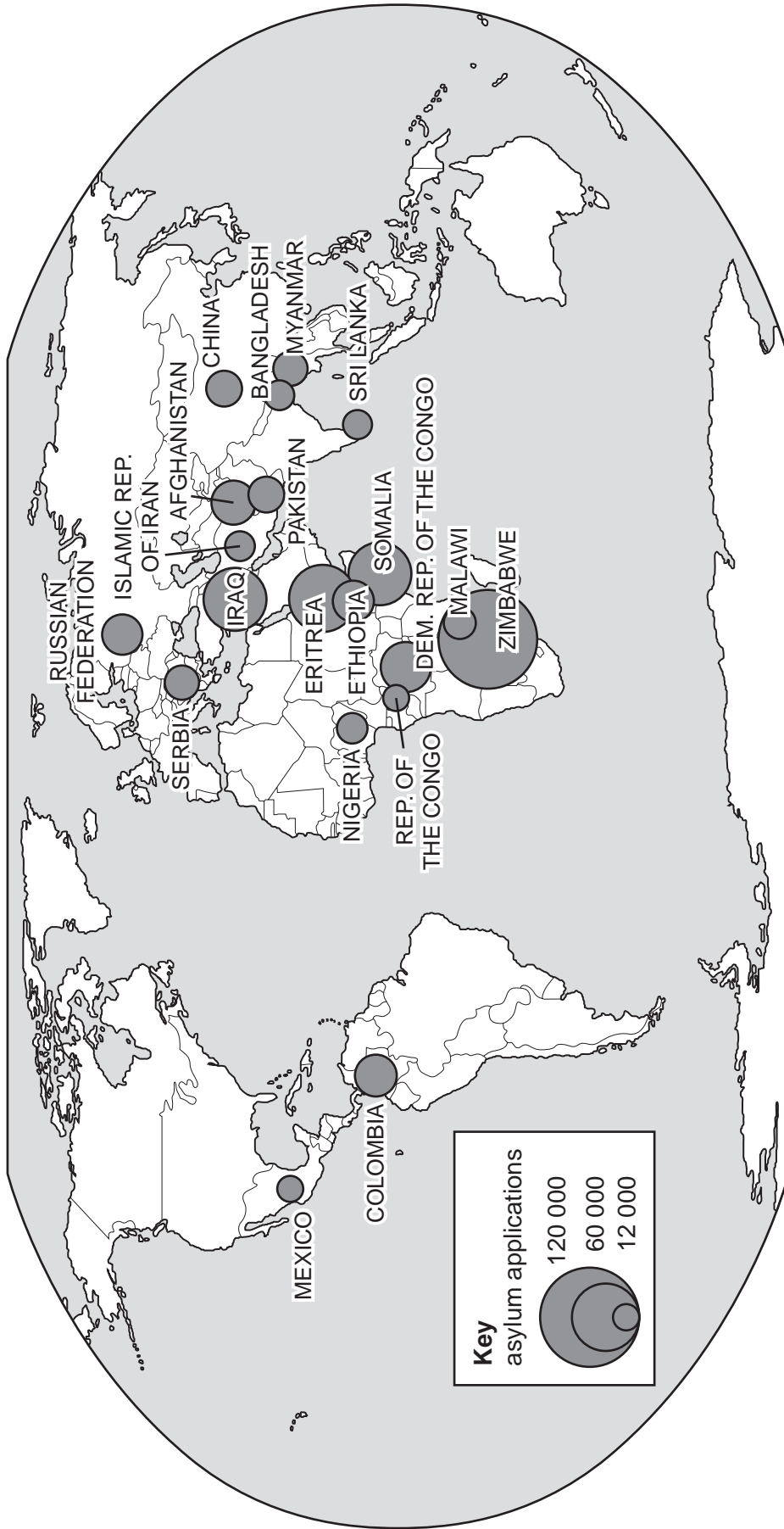


Table 1 for Question 4

Percentage population by region, 1950 to 2100

| region | actual | | | predicted | |
|---------------------------------|--------|-------|-------|-----------|-------|
| | 1950 | 1999 | 2008 | 2050 | 2100 |
| % of world population | | | | | |
| Africa | 8.8% | 12.8% | 14.6% | 19.8% | 23.7% |
| Asia | 55.6% | 60.8% | 60.4% | 59.1% | 57.1% |
| Europe | 21.7% | 12.2% | 10.9% | 7.0% | 5.3% |
| Latin America and the Caribbean | 6.6% | 8.5% | 8.6% | 9.2% | 9.4% |
| Northern America | 6.8% | 5.2% | 5.0% | 4.4% | 4.0% |
| Oceania | 0.5% | 0.5% | 0.5% | 0.5% | 0.5% |

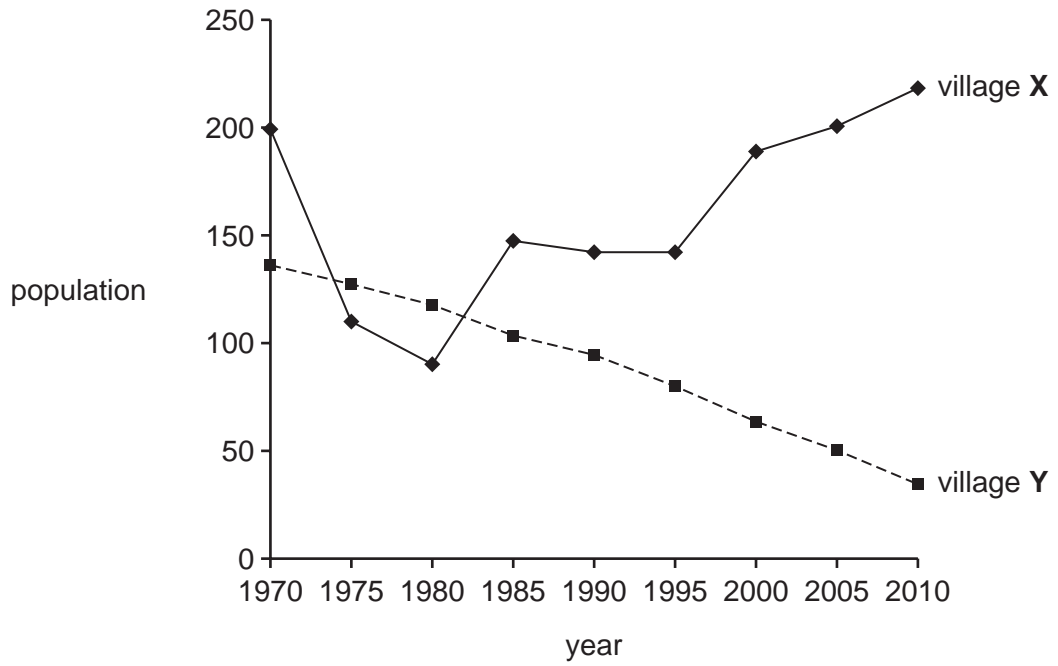
Fig. 4 for Question 5
Main countries of origin of international migrants seeing asylum in 2008



This map only shows countries from which the United Nations recorded more than 10 000 asylum-seekers during 2008.

Fig. 5 for Question 6

Population change in two villages in a rural area of an LEDC



BLANK PAGE

Permission to reproduce items where third-party owned material protected by copyright is included has been sought and cleared where possible. Every reasonable effort has been made by the publisher (UCLES) to trace copyright holders, but if any items requiring clearance have unwittingly been included, the publisher will be pleased to make amends at the earliest possible opportunity.

University of Cambridge International Examinations is part of the Cambridge Assessment Group. Cambridge Assessment is the brand name of University of Cambridge Local Examinations Syndicate (UCLES), which is itself a department of the University of Cambridge.