

---

**GEOGRAPHY**

**9696/11**

Paper 1 Core Geography

**May/June 2016**

INSERT

**3 hours**

---

**READ THESE INSTRUCTIONS FIRST**

This Insert contains the Photograph, Figures and the Table referred to in the questions.



---

This document consists of **7** printed pages and **1** blank page.

Photograph A for Question 1

A meander



Fig. 1 for Question 2

Global surface air pressure (mb) for one month

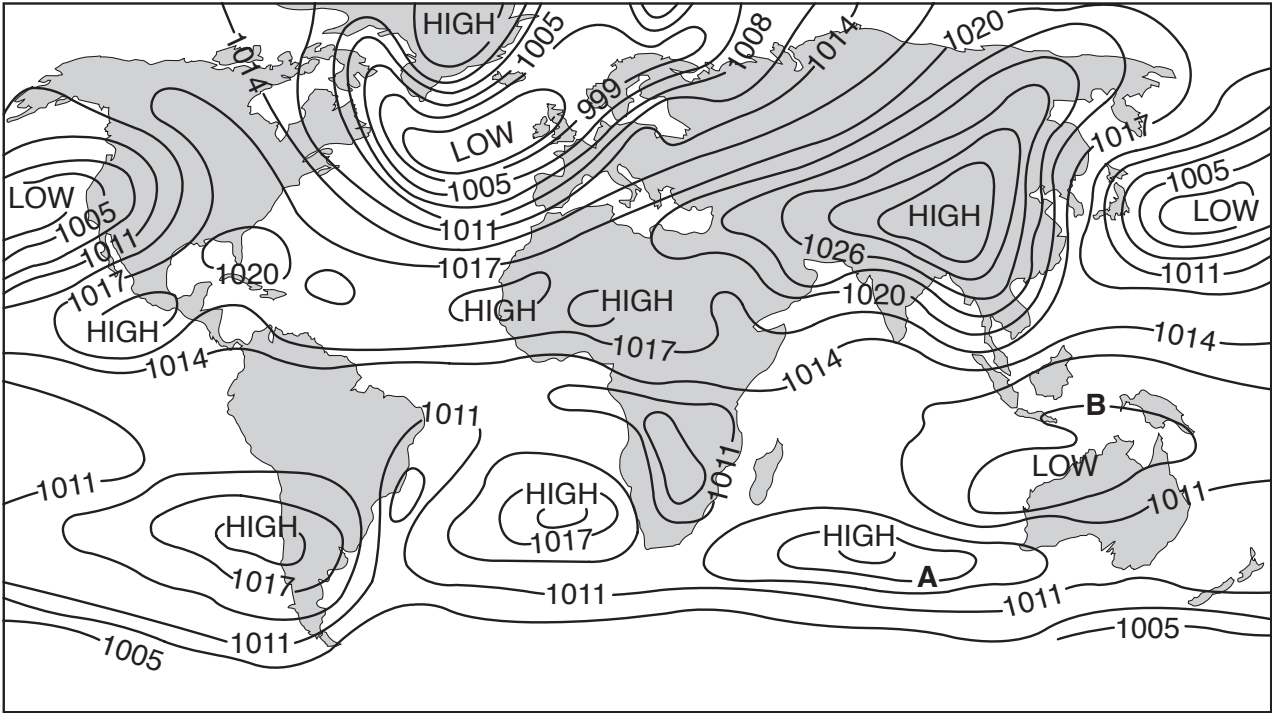


Fig. 2 for Question 3

## The dominant type of weathering in different climates

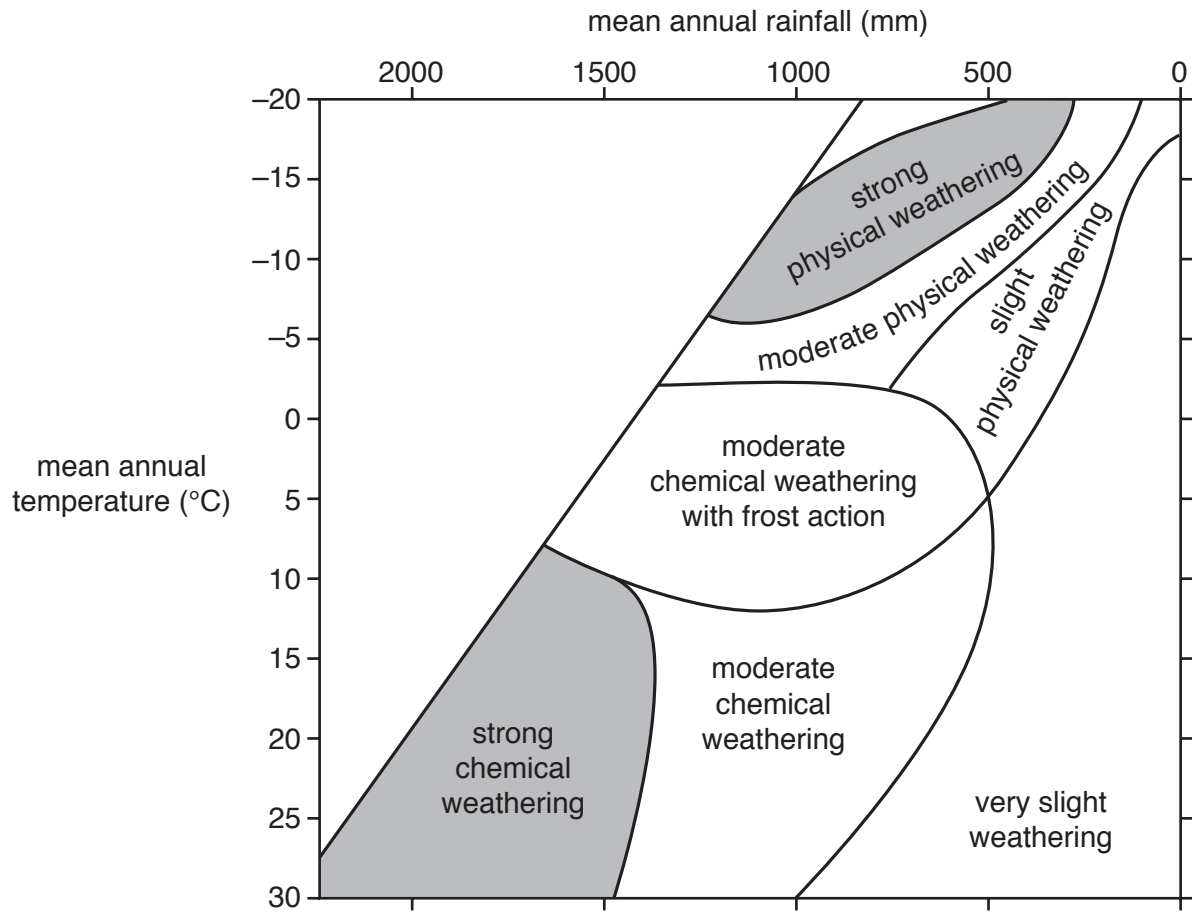


Table 1 for Question 4

**Birth rate and population growth rate for selected countries, 2014**

<b>Country</b>	<b>Birth rate (1 000 population)</b>	<b>Population growth rate (%)</b>
Niger	46	3.2
Angola	39	2.8
Ghana	32	2.2
Philippines	24	1.8
South Africa	19	-0.5
Indonesia	17	0.9
Brazil	15	0.8
Canada	10	0.8
Japan	8	-0.1

Fig. 3 for Question 5

## Migration between an urban area and a rural area in 1970 and 2012

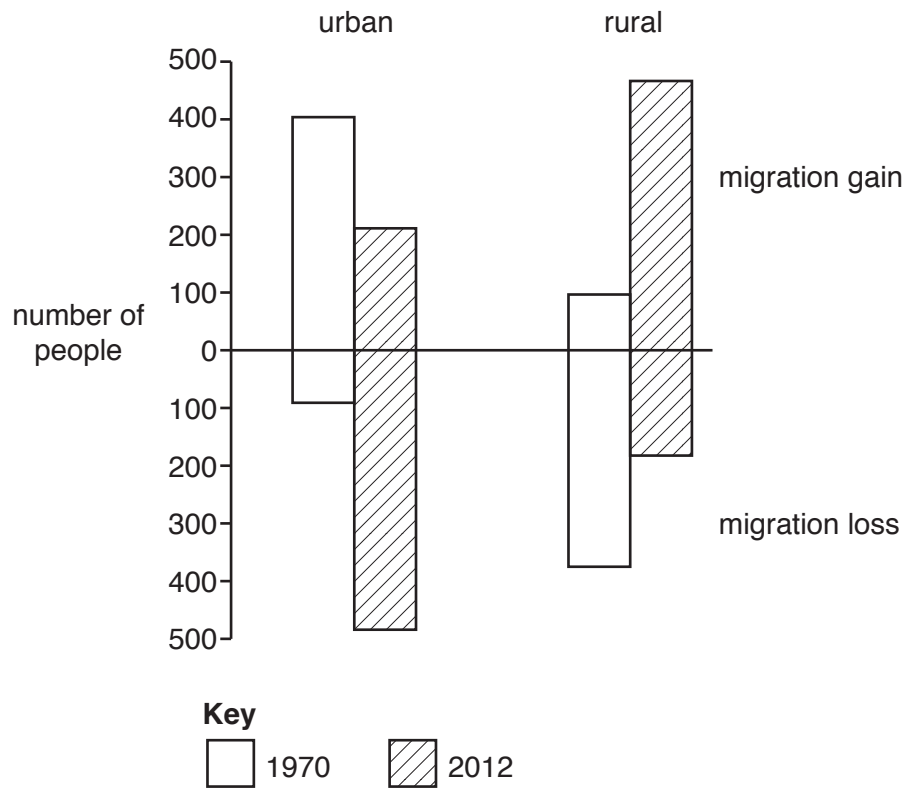
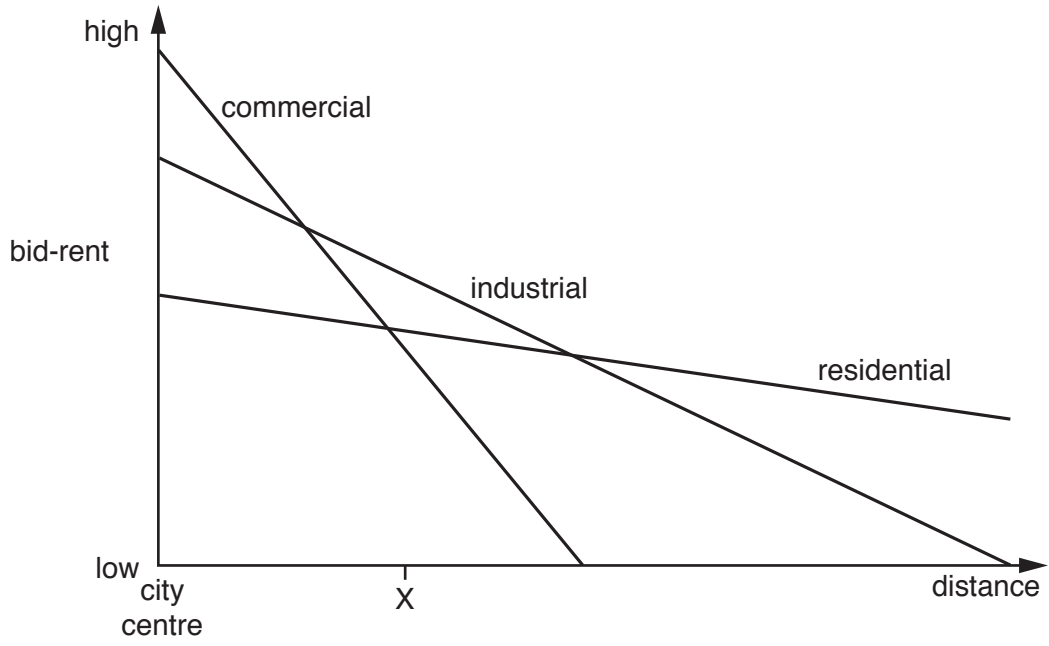


Fig. 4 for Question 6

Bid-rent for three urban land uses



**BLANK PAGE**

---

Permission to reproduce items where third-party owned material protected by copyright is included has been sought and cleared where possible. Every reasonable effort has been made by the publisher (UCLES) to trace copyright holders, but if any items requiring clearance have unwittingly been included, the publisher will be pleased to make amends at the earliest possible opportunity.

To avoid the issue of disclosure of answer-related information to candidates, all copyright acknowledgements are reproduced online in the Cambridge International Examinations Copyright Acknowledgements Booklet. This is produced for each series of examinations and is freely available to download at [www.cie.org.uk](http://www.cie.org.uk) after the live examination series.

Cambridge International Examinations is part of the Cambridge Assessment Group. Cambridge Assessment is the brand name of University of Cambridge Local Examinations Syndicate (UCLES), which is itself a department of the University of Cambridge.