

---

**GEOGRAPHY**

**9696/31**

Paper 3 Advanced Physical Geography Options

**May/June 2018**

INSERT

**1 hour 30 minutes**

---

**READ THESE INSTRUCTIONS FIRST**

This Insert contains all the resources referred to in the questions.



---

This document consists of **4** printed pages.

Fig. 1.1 for Question 1

A tropical granite landscape in Africa



Fig. 4.1 for Question 4

The development of a cliff and a wave-cut platform

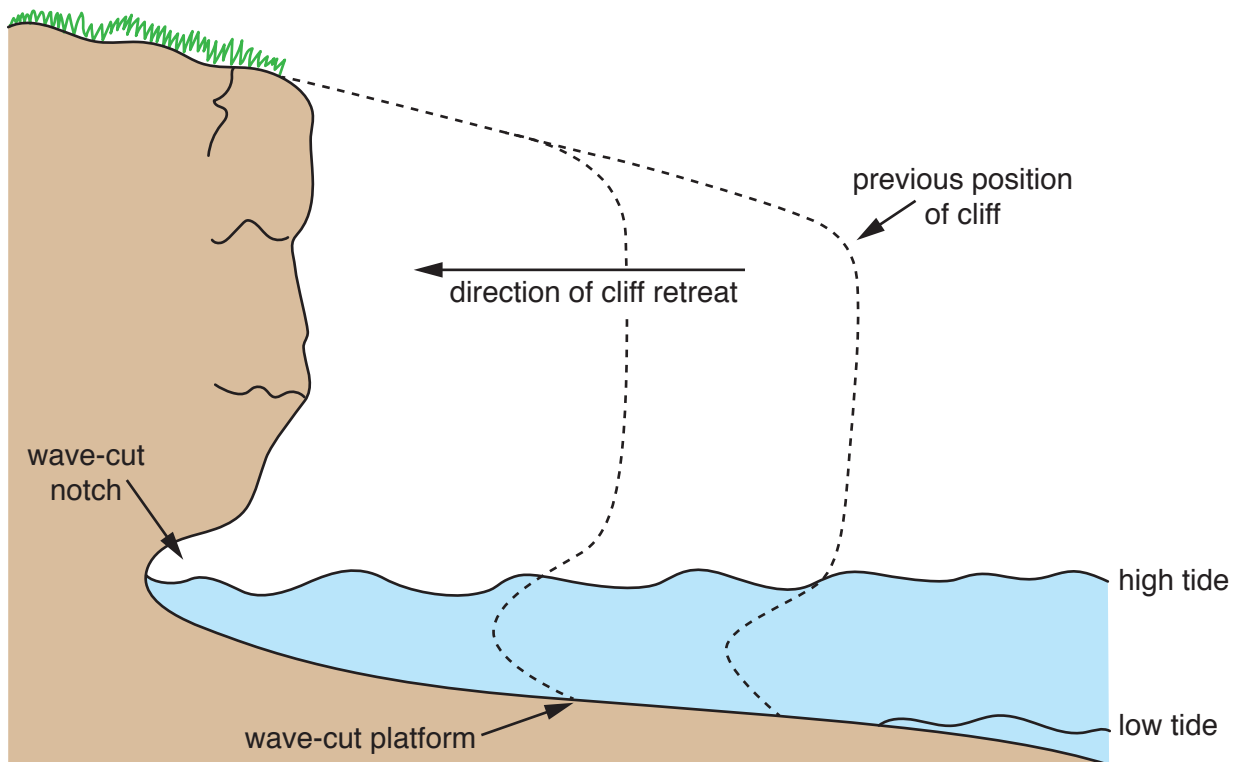


Fig. 7.1 for Question 7

Two types of mass movement

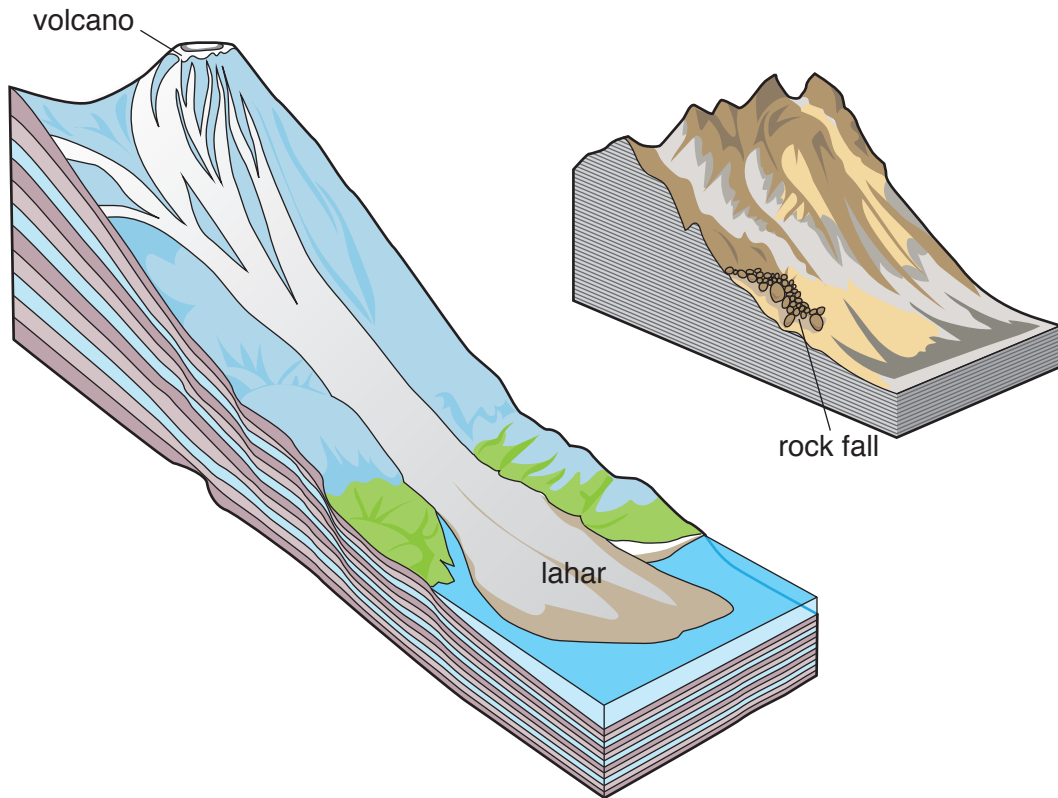
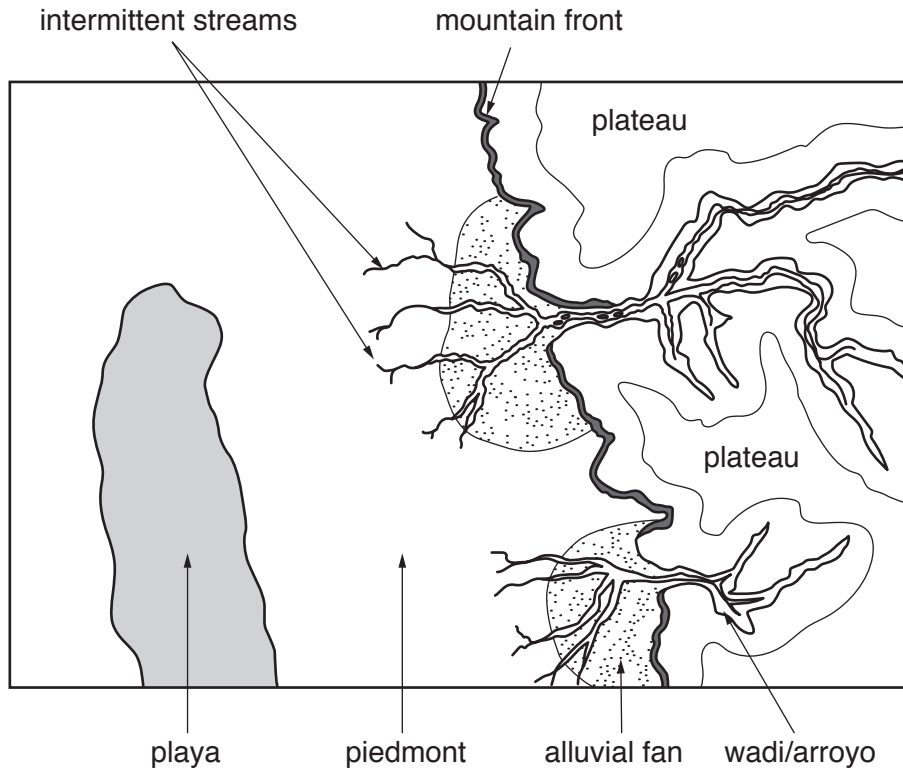


Fig. 10.1 for Question 10

## Desert landforms created by water



Permission to reproduce items where third-party owned material protected by copyright is included has been sought and cleared where possible. Every reasonable effort has been made by the publisher (UCLES) to trace copyright holders, but if any items requiring clearance have unwittingly been included, the publisher will be pleased to make amends at the earliest possible opportunity.

To avoid the issue of disclosure of answer-related information to candidates, all copyright acknowledgements are reproduced online in the Cambridge International Examinations Copyright Acknowledgements Booklet. This is produced for each series of examinations and is freely available to download at [www.cie.org.uk](http://www.cie.org.uk) after the live examination series.

Cambridge International Examinations is part of the Cambridge Assessment Group. Cambridge Assessment is the brand name of University of Cambridge Local Examinations Syndicate (UCLES), which is itself a department of the University of Cambridge.