

CANDIDATE
NAME

--

CENTRE
NUMBER

--	--	--	--	--

CANDIDATE
NUMBER

--	--	--	--



GEOGRAPHY

0460/11

Paper 1

May/June 2019

1 hour 45 minutes

Candidates answer on the Question Paper.

Additional Materials: Ruler
 Calculator
 Protractor

READ THESE INSTRUCTIONS FIRST

Write your centre number, candidate number and name in the spaces provided.

Write in dark blue or black pen.

You may use an HB pencil for any diagrams or graphs.

Do not use staples, paper clips, glue or correction fluid.

DO **NOT** WRITE IN ANY BARCODES.

Write your answer to each question in the space provided.

If additional space is required, you should use the lined pages at the end of this booklet. The question number(s) must be clearly shown.

Answer **three** questions, **one** from each section.

The Insert contains Fig. 1.1 for Question 1, Figs. 3.1 and 3.3 for Question 3, and Figs. 6.1 and 6.2 for Question 6.

The Insert is **not** required by the Examiner.

Sketch maps and diagrams should be drawn whenever they serve to illustrate an answer.

At the end of the examination, fasten all your work securely together.

The number of marks is given in brackets [] at the end of each question or part question.

Definitions

MEDCs – More Economically Developed Countries

LEDCs – Less Economically Developed Countries

This syllabus is regulated for use in England, Wales and Northern Ireland as a Cambridge International Level 1/Level 2 Certificate.

This document consists of **30** printed pages, **2** blank pages and **1** Insert.

Section A

Answer **one** question from this section.

1 (a) Study Fig. 1.1 (Insert), which shows information about immigrants to the USA in 2013.

(i) How many people were living in the USA in 2013 who were born in other countries?

Tick **one** answer in the table below:

	Tick (✓)
Less than 1000	
1000 to 9999	
10 000 to 99 999	
100 000 to 249 999	
250 000 to 499 999	
500 000 to 1 million	
Over 1 million	

[1]

(ii) Put the following countries in rank order according to the number of people born there who were living in the USA in 2013.

Argentina

Australia

China

Colombia

1st

2nd

3rd

4th

[2]

(iii) Using Fig. 1.1 **only**, suggest **three** reasons why there are more immigrants to the USA from Mexico (an LEDC) than from Spain (an MEDC).

- 1
-
- 2
-
- 3
-[3]

(iv) Describe the difficulties which immigrants from Mexico may experience when settling in the USA.

-
-
-
-
-
-
-
-
-
-[4]

- (b) Study Fig. 1.2, which shows information about immigration to the USA between 1901 and 2010.

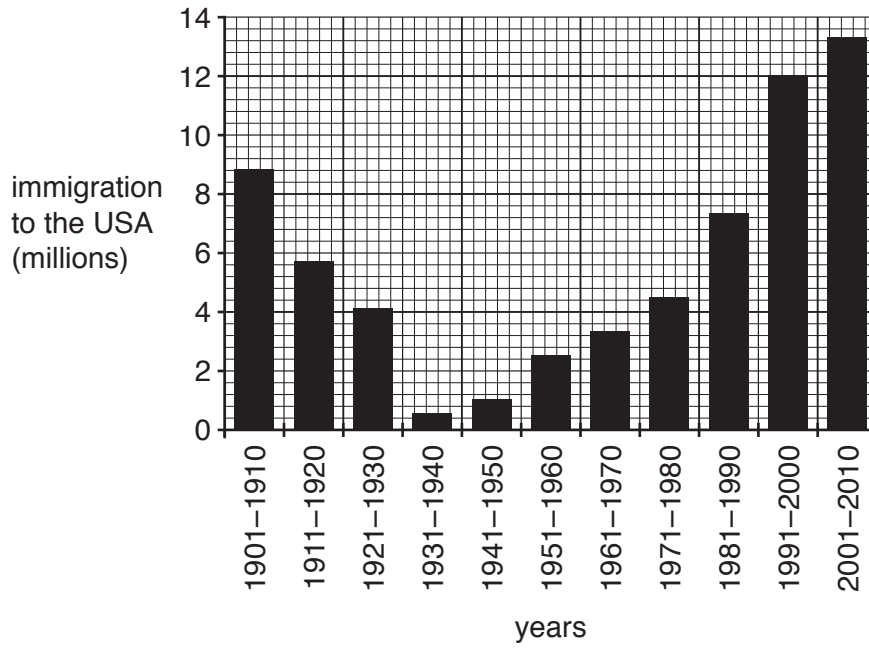


Fig. 1.2

- (i) Describe the changes in the numbers of immigrants to the USA between 1901 and 2010. You should refer to years and use statistics in your answer.

.....

.....

.....

.....

.....

.....

.....[3]

- 2 (a) Study Fig. 2.1, which shows information about the sources of air pollution in urban areas in Africa and Western Europe.

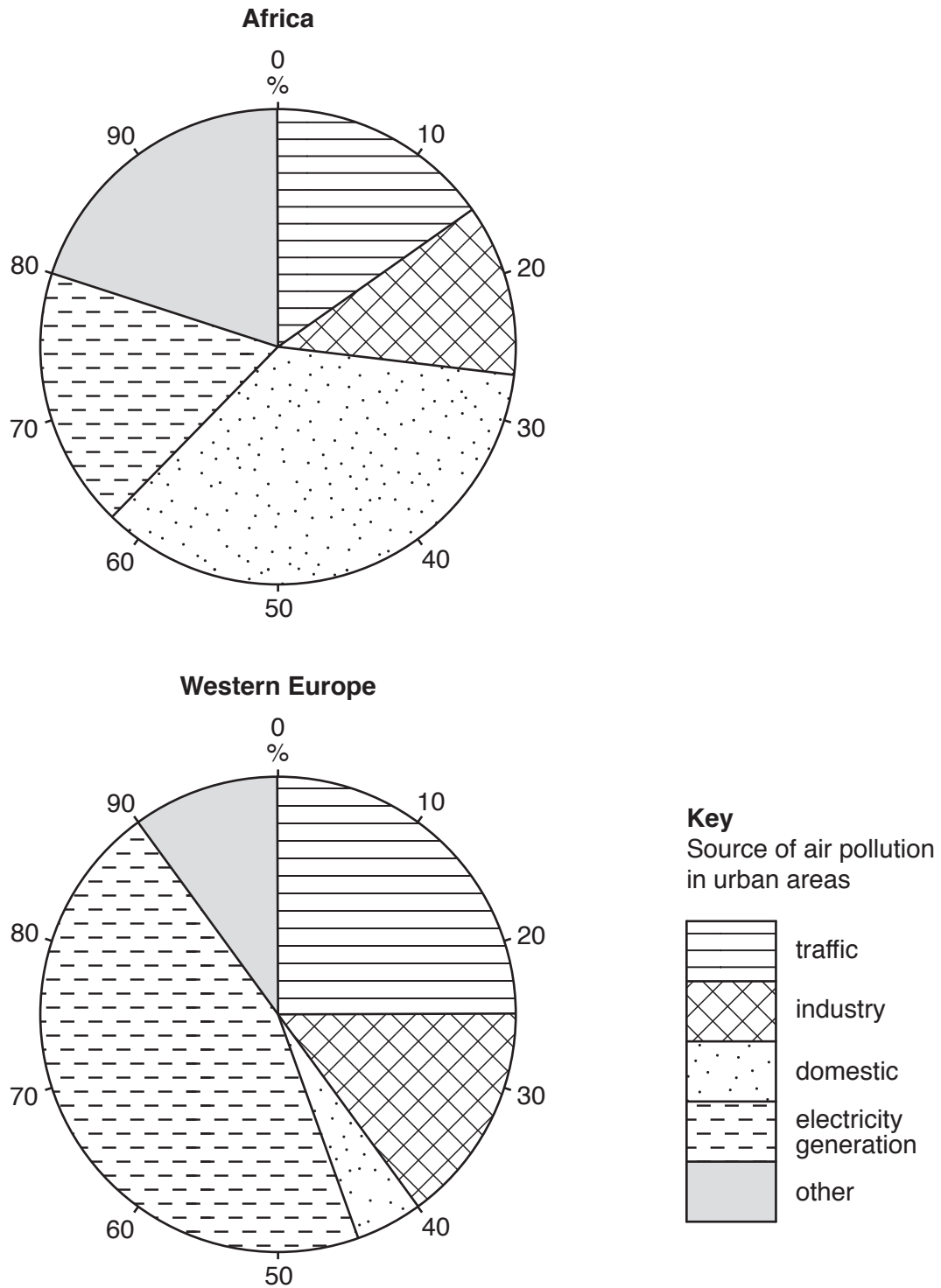


Fig. 2.1

- (i) What percentage of air pollution in urban areas in Western Europe is caused by traffic?

.....%

[1]

(ii) Explain how traffic and industry may each cause air pollution.

Traffic
.....

Industry
..... [2]

(iii) Using evidence from Fig. 2.1 **only**, compare sources of air pollution in urban areas in Africa and Western Europe.

.....
.....
.....
.....
.....
..... [3]

(iv) Suggest reasons for the differences in the sources of air pollution in urban areas in Africa and Western Europe.

.....
.....
.....
.....
.....
.....
..... [4]

(b) Study Fig. 2.2, which is a graph showing information about urban population density and traffic congestion in selected urban areas.

The greater the traffic congestion the more time people spend travelling.

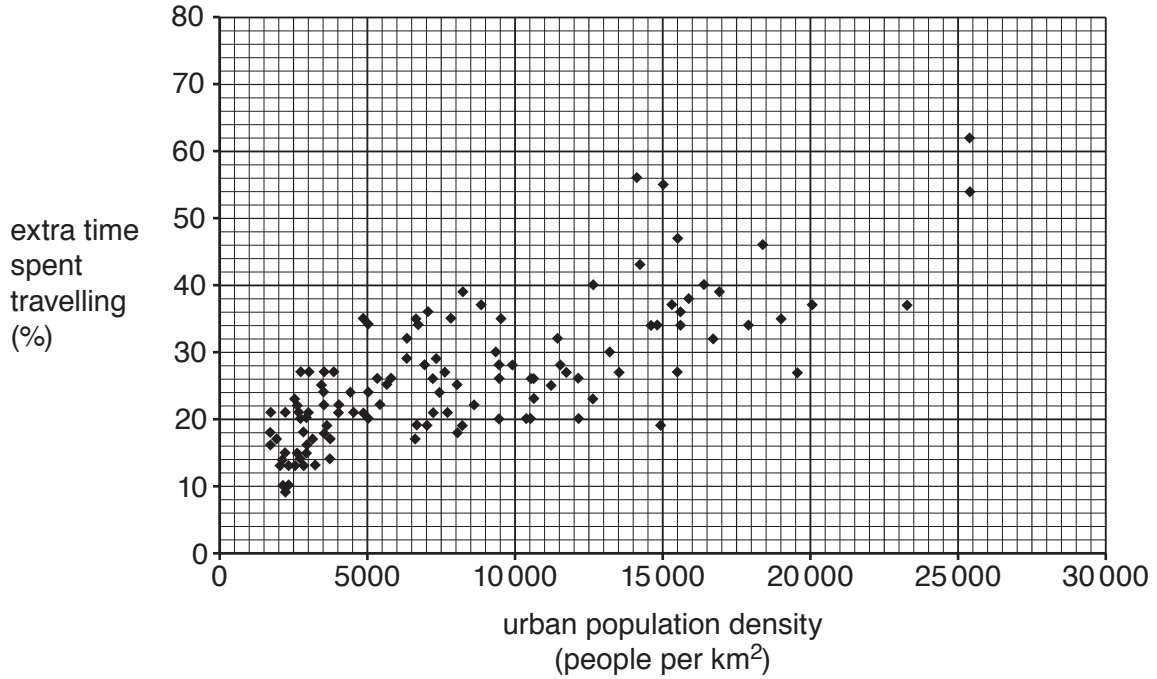


Fig. 2.2

(i) Describe the relationship between urban population density and the extra time spent travelling shown by Fig. 2.2. Use statistics in your answer.

.....

.....

.....

.....

.....

.....

..... [3]

Section B

Answer **one** question from this section.

- 3 (a) Study Fig. 3.1 (Insert), which is a photograph of part of a sand spit, and Fig. 3.2 an annotated sketch of a sand spit.

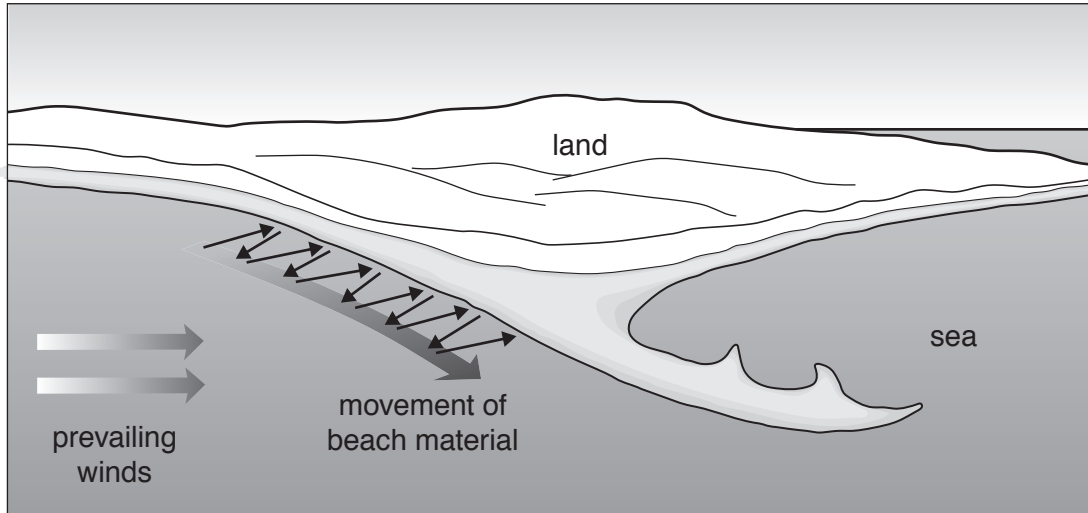


Fig. 3.2

- (i) Identify the type of coastal landform shown at **X** on Fig. 3.1.

.....[1]

- (ii) Describe **two** characteristics of the coastal landform shown at **X** on Fig. 3.1.

1

.....

2

.....[2]

- (iii) Explain how coastal landform **X** has been formed on the sand spit.

.....

.....

.....

.....

.....

.....

.....[3]

(iv) Explain how a sand spit is formed.

.....
.....
.....
.....
.....
.....
.....
.....
..... [4]

(b) Study Fig. 3.3 (Insert), which is a photograph of an area of coastline which has been affected by coastal erosion.

(i) Identify the coastal landforms labelled **P**, **Q** and **R** on Fig. 3.3 in the spaces below.

P

Q

R

[3]

(ii) Describe the processes of coastal erosion.

.....
.....
.....
.....
.....
.....
.....
.....
.....
.....
.....
.....
..... [5]

TURN PAGE FOR QUESTION 4

4 (a) Study Fig. 4.1, which is a map which shows two hot deserts in Southern Africa.

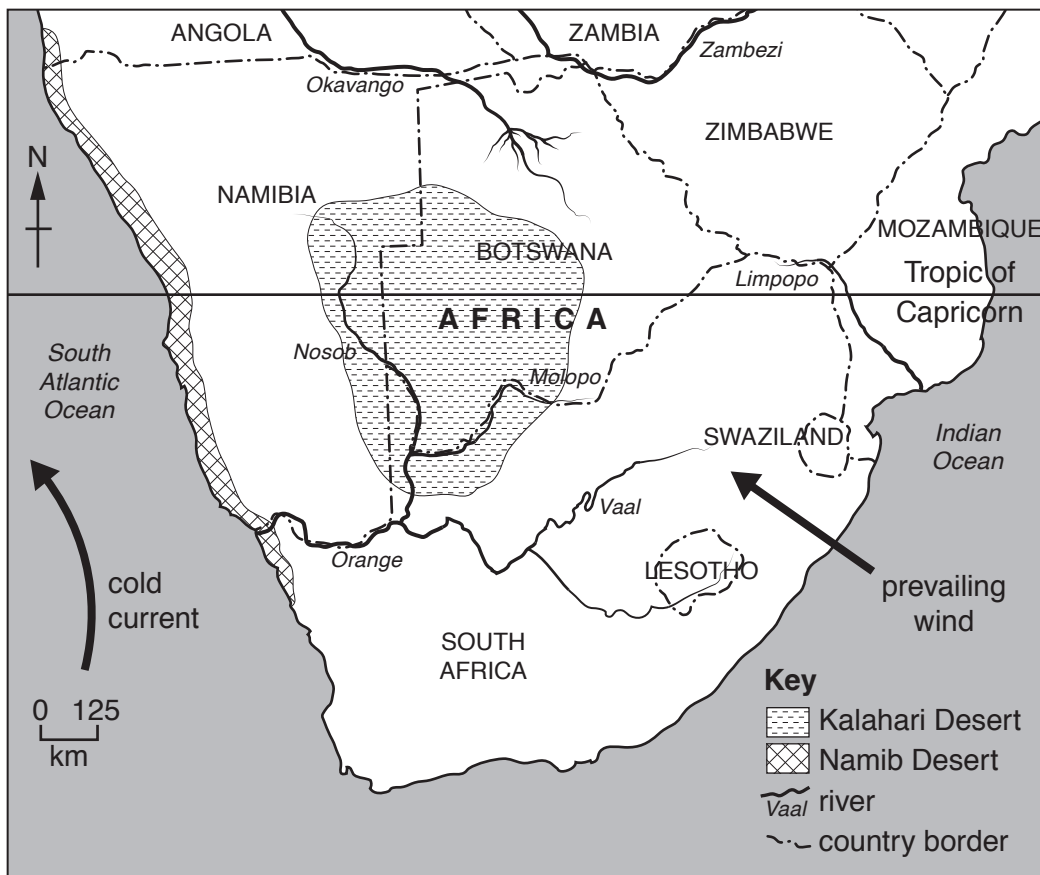


Fig. 4.1

(i) Tick the **one** statement which best describes the climate of a hot desert.

	Tick (✓)
deserts have no seasons	
every day the temperatures are above 35 °C	
the annual precipitation is lower than 250 mm	
there is never any precipitation	

[1]

(ii) State **one** similarity and **one** difference between the location of the Kalahari Desert and the location of the Namib Desert.

Similarity.....

Difference.....
 [2]

(iii) Explain why deserts, such as the Kalahari, have a high diurnal (daily) range of temperature.

.....
.....
.....
.....
.....
.....
.....[3]

(iv) Using evidence from Fig. 4.1 and your own knowledge, explain why the Namib Desert does not receive much rainfall.

.....
.....
.....
.....
.....
.....
.....
.....
.....[4]

(b) Study Fig. 4.2, which shows diagrams of two plants which grow in the desert.

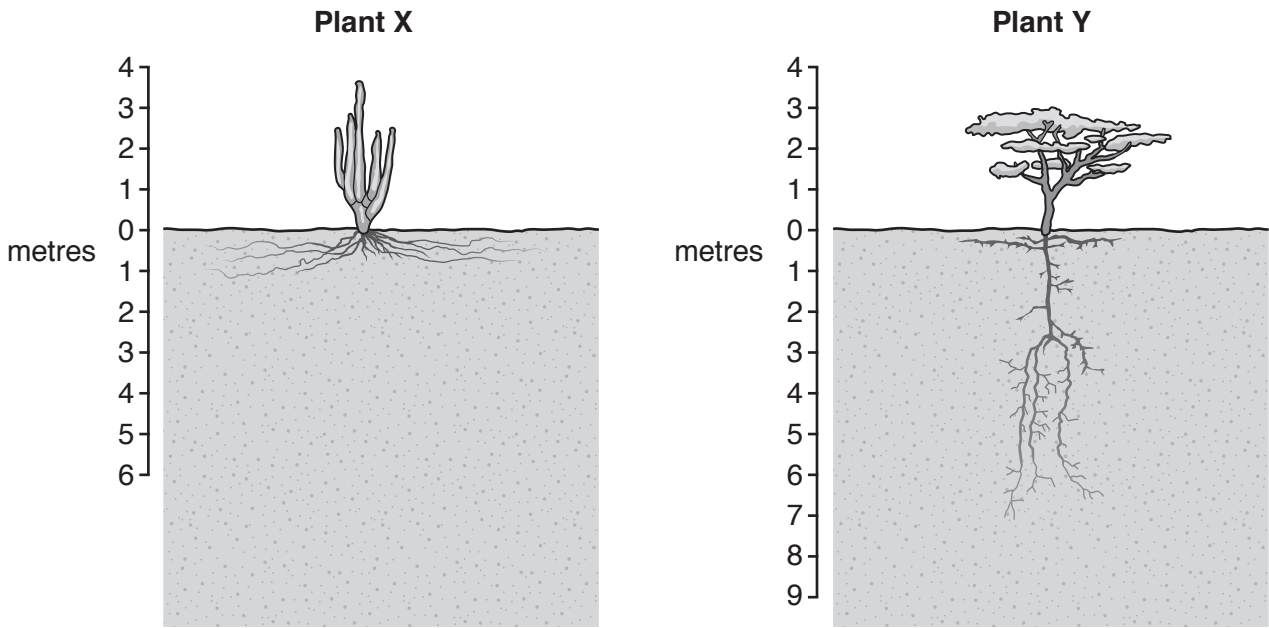


Fig. 4.2

(i) Identify **three** differences between plants X and Y.

- 1
 -
 - 2
 -
 - 3
 -
- [3]

Section C

Answer **one** question from this section.

- 5 (a) Study Fig. 5.1, which shows information about energy supply in New Zealand (an MEDC) in 2014.

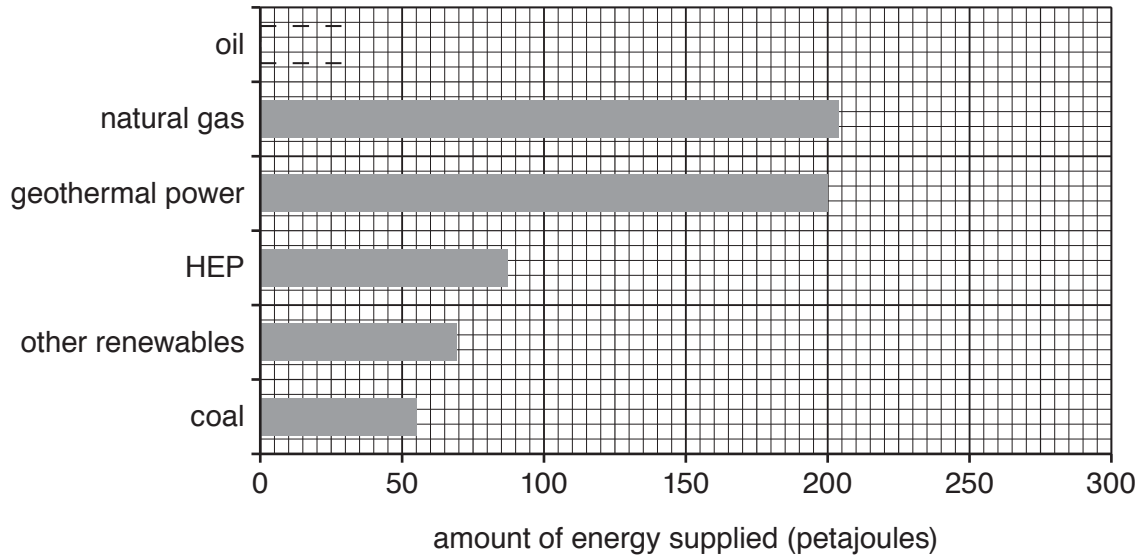


Fig. 5.1

- (i) **Complete the bar** on Fig. 5.1 to show the following information:

Amount of energy produced from oil = 275 petajoules [1]

- (ii) Name **two** types of renewable energy which could be included in the bar for 'other renewables'.

1

2 [2]

(iii) Using Fig. 5.1 **only**, compare the use of renewable and non-renewable energy in New Zealand. Use statistics in your answer.

.....
.....
.....
.....
.....
.....
.....[3]

(iv) Suggest reasons to explain why New Zealand does not use nuclear power.

.....
.....
.....
.....
.....
.....
.....
.....
.....[4]

- (b) Study Fig. 5.2, which is a table showing information about Gross Domestic Product (GDP) per person (a measure of wealth) and the use of electricity per person.

	GDP per person (US\$)	Electricity used (kWh per person)
Norway	69 300	24 621
USA	57 300	13 734
Australia	48 800	11 028
Germany	48 200	7 170
Canada	46 200	17 026
UK	42 500	5 578
France	42 400	7 483
Japan	38 900	8 065
New Zealand	37 100	9 802
Portugal	28 500	4 924
Turkey	21 100	3 259
Mexico	18 900	2 496

Fig. 5.2

- (i) Describe the relationship between GDP per person and the use of electricity per person shown by Fig. 5.2. Use statistics in your answer.

.....

.....

.....

.....

.....

.....

.....[3]

6 (a) Study Fig. 6.1 (Insert), which is a photograph of an area with an Equatorial climate where the land is being used for subsistence farming.

(i) What is meant by *subsistence* farming?

.....
.....
.....[1]

(ii) Identify **two** pieces of evidence that the forest has been cleared in the area shown in Fig. 6.1.

1
.....
2
.....[2]

(iii) Explain why soil erosion is likely to occur in the area shown in Fig. 6.1.

.....
.....
.....
.....
.....
.....
.....[3]

(iv) Describe the strategies which can be used by farmers to reduce soil erosion.

.....
.....
.....
.....
.....
.....
.....
.....
.....
.....
.....[4]

(b) Study Fig. 6.2 (Insert), which is a photograph of an area where economic activity is taking place.

(i) Suggest why each of the following types of pollution are occurring in the area shown in Fig. 6.2.

air pollution
.....

water pollution
.....

noise pollution
..... [3]

(ii) Explain how pollution may threaten the **local** natural environment.

.....
.....
.....
.....
.....
.....
.....
.....
.....
.....
.....
.....
.....
.....
.....
..... [5]

Ruled lines for writing.

BLANK PAGE

Permission to reproduce items where third-party owned material protected by copyright is included has been sought and cleared where possible. Every reasonable effort has been made by the publisher (UCLES) to trace copyright holders, but if any items requiring clearance have unwittingly been included, the publisher will be pleased to make amends at the earliest possible opportunity.

To avoid the issue of disclosure of answer-related information to candidates, all copyright acknowledgements are reproduced online in the Cambridge Assessment International Education Copyright Acknowledgements Booklet. This is produced for each series of examinations and is freely available to download at www.cambridgeinternational.org after the live examination series.

Cambridge Assessment International Education is part of the Cambridge Assessment Group. Cambridge Assessment is the brand name of the University of Cambridge Local Examinations Syndicate (UCLES), which itself is a department of the University of Cambridge.