



Cambridge International Examinations
Cambridge International General Certificate of Secondary Education

CANDIDATE
NAME

CENTRE
NUMBER

--	--	--	--	--

CANDIDATE
NUMBER

--	--	--	--



CAMBRIDGE INTERNATIONAL MATHEMATICS

0607/11

Paper 1 (Core)

October/November 2017

45 minutes

Candidates answer on the Question Paper.

Additional Materials: Geometrical Instruments

READ THESE INSTRUCTIONS FIRST

Write your Centre number, candidate number and name on all the work you hand in.

Write in dark blue or black pen.

Do not use staples, paper clips, glue or correction fluid.

You may use an HB pencil for any diagrams or graphs.

DO NOT WRITE IN ANY BARCODES.

Answer **all** the questions.

CALCULATORS MUST NOT BE USED IN THIS PAPER.

All answers should be given in their simplest form.

You must show all the relevant working to gain full marks and you will be given marks for correct methods even if your answer is incorrect.

The number of marks is given in brackets [] at the end of each question or part question.

The total number of marks for this paper is 40.

This document consists of 8 printed pages.

Formula List

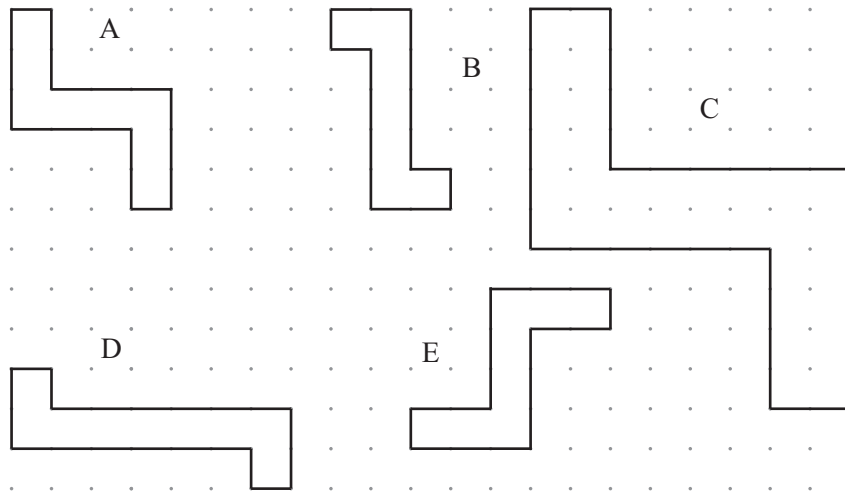
Area, A , of triangle, base b , height h .	$A = \frac{1}{2}bh$
Area, A , of circle, radius r .	$A = \pi r^2$
Circumference, C , of circle, radius r .	$C = 2\pi r$
Curved surface area, A , of cylinder of radius r , height h .	$A = 2\pi rh$
Curved surface area, A , of cone of radius r , sloping edge l .	$A = \pi rl$
Curved surface area, A , of sphere of radius r .	$A = 4\pi r^2$
Volume, V , of prism, cross-sectional area A , length l .	$V = Al$
Volume, V , of pyramid, base area A , height h .	$V = \frac{1}{3}Ah$
Volume, V , of cylinder of radius r , height h .	$V = \pi r^2 h$
Volume, V , of cone of radius r , height h .	$V = \frac{1}{3}\pi r^2 h$
Volume, V , of sphere of radius r .	$V = \frac{4}{3}\pi r^3$

4 Work out $3^0 \times 4^{-2}$.

Give your answer as a fraction.

..... [2]

5



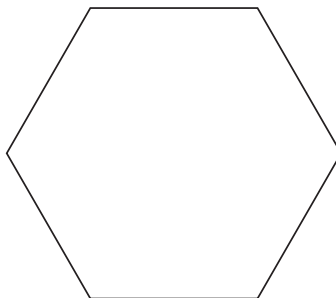
(a) Write down the letters of two congruent shapes.

..... and [1]

(b) Write down the letters of two shapes which are similar but not congruent.

..... and [1]

6 Draw all the lines of symmetry on this regular hexagon.



[2]

7 When $f(x) = \frac{6}{x}$, find

(a) $f(2)$,

..... [1]

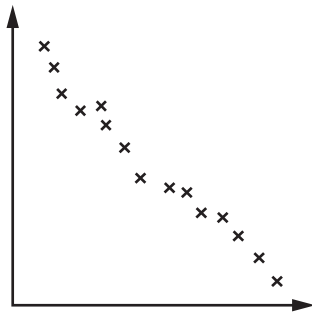
(b) $f(-2)$,

..... [1]

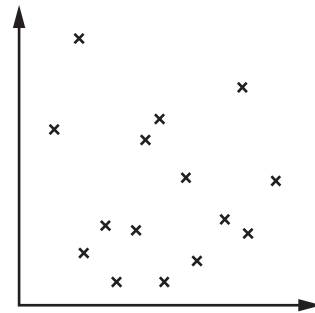
(c) $f\left(\frac{1}{2}\right)$.

..... [1]

8 What type of correlation is shown in each scatter diagram?



.....



.....

[2]

9 $U = \{1, 2, 3, 4, 5, 6\}$ $A = \{2, 4, 6\}$ $B = \{2, 3, 5, 6\}$ $C = \{2, 4\}$

Complete the following.

(a) $A \cap B$ = { } [1]

(b) B' = { } [1]

(c) $B \cup C$ = { } [1]

(d) $n(B \cup C)$ = [1]

10 Find the smallest integer value, x , such that

(a) $x > -3$, [1]

(b) $2x > 16$ [1]

11 (a) Find the value of $6x + 7y$ when $x = 3$ and $y = -5$.

..... [2]

(b) Write down an expression, in terms of x and y , for the total cost of x apples at 70 cents each and y pears at 50 cents each.

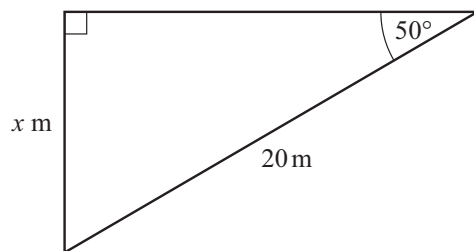
..... cents [2]

(c) A line has equation $3x + 4y = 12$.

Write the equation of this line in the form $y = mx + c$.

$y =$ [2]

12



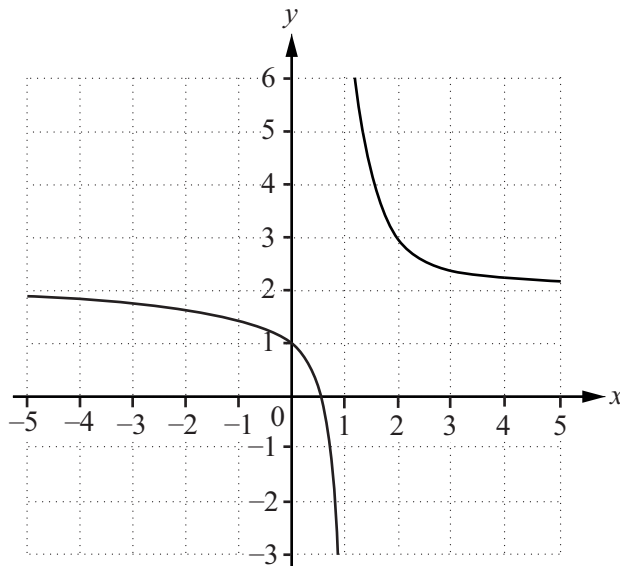
NOT TO SCALE

$\sin 50^\circ = 0.766$ $\cos 50^\circ = 0.643$ $\tan 50^\circ = 1.192$

Use the information given to work out the value of x .

$x =$ [2]

13



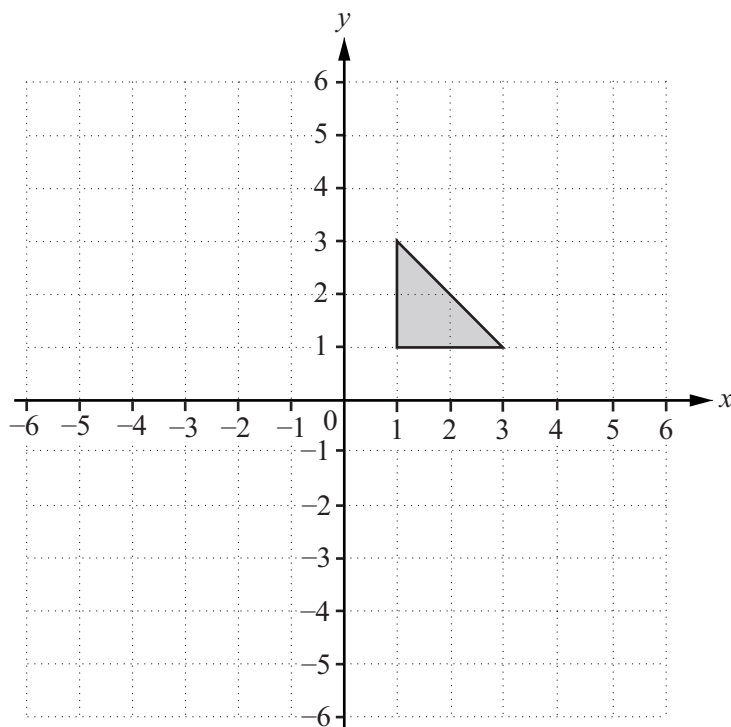
Write down the equations of the two asymptotes of the graph.

.....

.....

[2]

14

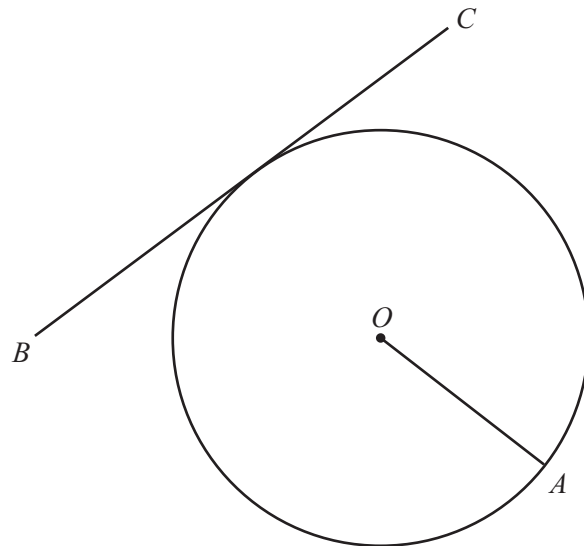


On the grid, enlarge the shaded triangle with scale factor 2, centre (3, 4).

[2]

Question 15 is printed on the next page.

15 (a)

NOT TO
SCALE

The diagram shows a circle centre O .

Write down the mathematical word that describes the line

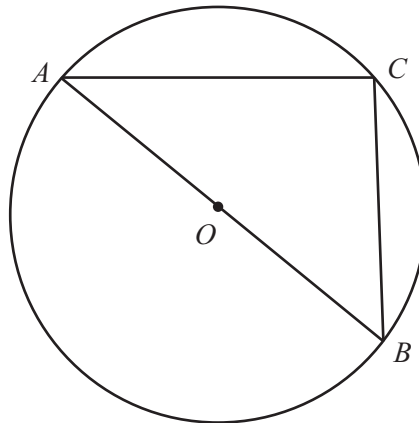
(i) OA ,

..... [1]

(ii) BC .

..... [1]

(b)

NOT TO
SCALE

AB is a diameter of a circle centre O .

Write down the size of angle ACB .

Angle $ACB =$ [1]

Permission to reproduce items where third-party owned material protected by copyright is included has been sought and cleared where possible. Every reasonable effort has been made by the publisher (UCLES) to trace copyright holders, but if any items requiring clearance have unwittingly been included, the publisher will be pleased to make amends at the earliest possible opportunity.

To avoid the issue of disclosure of answer-related information to candidates, all copyright acknowledgements are reproduced online in the Cambridge International Examinations Copyright Acknowledgements Booklet. This is produced for each series of examinations and is freely available to download at www.cie.org.uk after the live examination series.

Cambridge International Examinations is part of the Cambridge Assessment Group. Cambridge Assessment is the brand name of University of Cambridge Local Examinations Syndicate (UCLES), which is itself a department of the University of Cambridge.